



# DELHI PUBLIC SCHOOL

SAIL Township, Ranchi

FIRST SEMESTER EXAMINATION (SESSION-2022-23)

**SUBJECT:** ENGLISH

**DATE :-** 08.09.2022

**CLASS:** – I **Sec:-** \_\_\_\_\_

**Time:** 2 Hours

**M.O. :-** \_\_\_\_\_

**Roll no.:-** \_\_\_\_\_

**F. M. :-** 40

**NAME:-** \_\_\_\_\_

**I. Tick (✓) the correct answer:**

**[0.5x5=2.5]**

1. The name of Aman's baby sister is \_\_\_\_

i) Mahi

ii) Aarti

iii) Nikhil

2. Out in the garden, I bounce my \_\_\_\_

i) kite

ii) play

iii) ball

3. The mice lived happily in a \_\_\_\_

i) colony

ii) tree

iii) water

4. The blue and yellow colours are mixed and it turns \_\_\_\_

i) pink

ii) green

iii) yellow

5. King Brahmadutta had \_\_\_\_ princes.

i) two

ii) three

iii) four

**II. Fill in the blanks using (is, am, are):-**

**[0.5x3=1.5 ]**

1. You \_\_\_\_\_ a woman.

2. Sagar \_\_\_\_\_ a fast bowler.

3. I \_\_\_\_\_ three- feet tall.

**III. Underline the correct answer:**

**[0.5x2=1]**

1. **This / That** star is shining brightly in the sky.

2. **That / This** is my nose.

**IV. Choose and write the correct sound of these animals:** [0.5x4=2]

1. Cow- \_\_\_\_\_ (laughs/moos)      2. Cat- \_\_\_\_\_ (hoots/mews)  
3. Peacock- \_\_\_\_\_ (crows/screams).      4. Frog- \_\_\_\_\_ ( croaks/hoots)

**V. CIRCLE the Common Noun and UNDERLINE the Proper Noun:** [0.5x4=2]

1. Sachin has a new bat.  
2. My dog Marshal is very naughty.

**VI. PICTURE COMPOSITION** [0.5x4=2]



**Answer in ONE WORD only:**

1. What is the girl doing to the plants? \_\_\_\_\_  
2. How many butterflies can you see in the picture? \_\_\_\_\_  
3. Who is hiding behind the cabbage? \_\_\_\_\_  
4. What is shining brightly in the sky? \_\_\_\_\_

**VII. UNSEEN PASSAGE** [0.5x4=2]

Riya went to the park outside her house. In the park she saw a very pretty butterfly. The butterfly was blue and yellow in colour. It was sitting on a white petal.

**Fill in the blanks choosing the words from the passage:**

1. Riya went to the park \_\_\_\_\_ her house.  
2. The butterfly was blue and \_\_\_\_\_ in colour.

3. It was sitting on a \_\_\_\_\_ petal.

4. The opposite of 'ugly ' is \_\_\_\_\_.

**VIII. Match with the meanings:**

[0.5x4=2]

1. Pleasantest a) driver of a chariot

2. Charioteer b) very enjoyable

3. Trampled c) faithful

4. Loyalty d) stepped heavily on

**IX. Write the word pair of the following:**

[0.5x2=1]

1. bread and \_\_\_\_\_

2. coat and \_\_\_\_\_

**X. Write the plural of:**

[0.5x2=1]

1. star- \_\_\_\_\_

2. dress- \_\_\_\_\_

**XI. Make Sentences:**

[1x5=5]

1. beautiful- \_\_\_\_\_

2. friends- \_\_\_\_\_

3. different- \_\_\_\_\_

4. painting- \_\_\_\_\_

5. wonderful - \_\_\_\_\_

**XII. Join these pairs of sentences using 'and'-**

[1x3=3]

1. Tina eats apples. Tina eats grapes.

\_\_\_\_\_

2. John likes cats. John likes dogs.

\_\_\_\_\_

3. We found a kitten. We took it home.

\_\_\_\_\_

**XIII. Answer the following questions in complete sentences:**

[2x5 =10]

Q1. Why was Nikhil coming?

\_\_\_\_\_

\_\_\_\_\_

\_\_\_\_\_

Q2. What is a dandelion?

---

---

---

Q3. On what day does the speaker like to play?

---

---

---

Q4. Why did the tree look different to each of the princes?

---

---

---

Q5. What does the child see when the swing goes up ?

---

---

---

**XIV. Write five sentences on ANY ONE.**

**[1x5=5]**

**Myself      OR      My Parents**

1. \_\_\_\_\_  
\_\_\_\_\_

2. \_\_\_\_\_  
\_\_\_\_\_

3. \_\_\_\_\_  
\_\_\_\_\_

4. \_\_\_\_\_  
\_\_\_\_\_

5. \_\_\_\_\_  
\_\_\_\_\_



# DELHI PUBLIC SCHOOL

SAIL Township, Ranchi

FIRST SEMESTER EXAMINATION (SESSION-2022-23)

**SUBJECT:** EVS

**DATE :-** 15.09.2022

**CLASS: – I Sec:-** \_\_\_\_\_

**Time:** 2 Hours

**M.O. :-** \_\_\_\_\_

**Roll no.:-** \_\_\_\_\_

**F. M. :-** 40

**NAME:-** \_\_\_\_\_

## I. Tick the correct option.

[1x10=10]

1) Brunch is a meal which we eat late in the morning in place of

- a) breakfast       b) lunch       c) breakfast and lunch

2) When traffic lights turn red it means to

- a) get ready       b) go       c) stop




3) Children wear \_\_\_\_\_ at night.

- a) tracksuit       b) nightsuit       c) swimsuit

4) A \_\_\_\_\_ family has parents and more than two children.

- a) small       b) big       c) joint

5) A house that is made-up of wood, straw, bamboo and mud is a \_\_\_\_\_.

- a) kutcha house        b) pucca house        c) stilt house  

6) Which of the following thing is safe for sharpening a pencil ?

- a)        b)        c) 

7) Do not touch heating objects like \_\_\_\_\_.

- a) heater, iron and oven       b) chair, table and desk       c) box, shelf and bottles

8) Our uncle's or aunt's children are our \_\_\_\_\_.

- a) cousins       b) brother /sister       c) siblings

9) \_\_\_\_\_ tree shows how members of a family are related to each other.

a) mango

b) Family

c) apple

10) \_\_\_\_\_ keeps the body of a polar bear warm.

a) wings

b) cotton

c) Fur

**II Give one word answer for the following:**

**[1x4=4]**

1) We should keep our nails \_\_\_\_\_.

2) Water is important for our \_\_\_\_\_.

3) Walk on the \_\_\_\_\_, while walking on the side of the road.

4) We should sleep at least for \_\_\_\_\_ hours at night .

**III. Fill in the blanks:**

**[1x3=3]**

1) We write with our \_\_\_\_\_ .

2) Milk makes our teeth and bones \_\_\_\_\_ .

3) We use \_\_\_\_\_ to make sweaters.

**IV .Write (T) for true and ( F) for false for the statements given below :**

**[0.5x3=1.5]**

1) A big family is a joint family.

2) We get honey from bees.

3) Igloos are made up of wood, bamboo and mud.

**V. Match the following:**

[0.5x4=2]

1) Stand in a queue

keeps us healthy.

2) Our nose helps to

live in water.

3) Fish and octopus

at the bus stop.

4. Exercise

smell.

**VI. Fill in the blanks by choosing the correct word from the help box.**

[0.5x3=1.5]

Water , Kutcha , small

1) \_\_\_\_\_ houses are mostly found in villages.

2) Father, mother and children make a \_\_\_\_\_ family.

3) \_\_\_\_\_ helps to digest our food.

**VII. Define :**

[1x3=3]

1) Uniform - \_\_\_\_\_

---

---

2) Relatives - \_\_\_\_\_

---

---

3) Good house - \_\_\_\_\_

---

---

**VIII. Name two:**

[0.5x6=3]

1) things you eat for lunch

\_\_\_\_\_, \_\_\_\_\_.

2) parts of face

\_\_\_\_\_, \_\_\_\_\_.

3) Indoor games

\_\_\_\_\_, \_\_\_\_\_.

**IX. Answer the following questions in complete sentences:-**

[2x5=10]

1) How do sense organs help us?

---

---

---

2) List two good habits.

---

---

---

3) Why is milk important for us?

---

---

---

4) List two safety rules while travelling in the bus.

---

---

---

5) What is a pucca house?

---

---

---

**X. Draw, colour and label any one :**

**[1x2=2]**

Kutcha house **OR** one healthy food item







# DELHI PUBLIC SCHOOL

SAIL Township, Ranchi

FIRST SEMESTER EXAMINATION (SESSION-2022-23)

**SUBJECT:** Hindi

**DATE :-** 13.09.2022

**CLASS: – I Sec:-** \_\_\_\_\_

**Time:** 2 Hours

**M.O. :-** \_\_\_\_\_

**Roll no.:-** \_\_\_\_\_

**F. M. :-** 40

**NAME:-** \_\_\_\_\_

**I. सही उत्तर चुनकर (✓) लगाएँ :**

**[0.5 x 4 = 2]**

1. इनमें से कौन भाषा का रूप नहीं है ?

(क) सोचना

(ख) सोना

(ग) बोलना

2. चीता क्या लाया ?

(क) खीर

(ख) मिठाई

(ग) जलेबी

3. चूहे का क्या नाम था?

(क) कालू

(ख) मीनू

(ग) मीना

4. वैभव ने कहाँ के चित्र लिये ?

(क) पटना

(ख) नैनीताल

(ग) बरेली

**II. चित्र देखकर सही वर्ण पर (✓) चिह्न लगाओ :**

**[0.5 x 2 = 1]**

(क) ..... मली → ( इ / ई )



(ख) ..... न → ( उ / ऊ )



**III. सही मात्रा लगाओ :**

**[1 x 2 = 2]**

(क) बन.....रस ( ा / ऐ )

(ख) च.....कीदार ( ऐ / ऐ )

IV. सही मिलान करें :

[0.5 x 4 = 2]

- |          |         |                          |
|----------|---------|--------------------------|
| 1. आकाश  | उछलना   | <input type="checkbox"/> |
| 2. खुश   | पायसम्  | <input type="checkbox"/> |
| 3. खीर   | प्रसन्न | <input type="checkbox"/> |
| 4. कूदना | आसमान   | <input type="checkbox"/> |

V. शब्दों को सही जगह पर लिखकर वाक्य बनाओ :

[1 x 3 = 3]

1 खाता + आम + मोहन + है।

.....

2 पर + है + पेड़ + बैठी + चिड़िया ।

.....

3. नाच + मोर + है + रहा।

.....

VI. चित्र देखकर प्रश्नों के उत्तर दो :

[0.5 x 4 = 2]



कहानी      हरियाली      पेड़      बगीचे

1. यह ..... का चित्र है।
2. .... पर दो बच्चे हैं।
3. दादी रानी को ..... सुना रही हैं।
4. बगीचे में ..... है ।

**VII. दिए गए गद्यांश को पढ़कर प्रश्नों के उत्तर एक शब्द में दें :**

**[1x 3 = 3]**

जंगल में एक बकरी घास खा रही थी। उसी समय एक भेड़िया आया। बकरी उसे देखते ही भागने लगी। तभी पास में एक हिरण नाले में पानी पीता दिखाई दिया। उसके पास जा कर बकरी ने अपनी जान बचाई।

1. बकरी किसे देख कर भागी ?

उत्तर— .....

2. बकरी क्या खा रही थी?

उत्तर— .....

3. "हिरण" का एक और नाम बताओ ?

उत्तर— .....

**VIII. एक शब्द में उत्तर दो :-**

**[1x 4 = 4]**

1. मधु की बड़ी बहन कौन थी?

उत्तर— .....

2. आसमान पर क्या छाया?

उत्तर— .....

3. रवि किस पर आया?

उत्तर— .....

4. ढोल किसने बजाया ?

उत्तर— .....

**IX. वाक्य बनाओ :**

**[1x5 = 5]**

1. खिलौने —.....

2. झील —.....

3. भूखा —.....

4. गुड़िया —.....

5. कविता —.....

**X. किसने कहा:**

**[1x2=2 ]**

1. "भैया, कितना मज़ा आ रहा है!"

उत्तर—.....

2. "होली है! भई होली है ! नाचो गाओ होली है।"

उत्तर—.....

**XI. प्रश्नों के उत्तर लिखें :**

**[1.5 x 4 = 6]**

1. मधु के घर कौन-कौन आया ?

उत्तर—.....

.....

2. कोयल ने किस पर गुलाल डाल दिया ?

उत्तर—.....

.....

3. कौन-कौन नैनीताल गए ?

उत्तर—.....

.....

4. कौन शोर मचाते आते ?

उत्तर—.....

.....

**XII. 'तोता' अथवा 'मेरे दादाजी' विषय पर पाँच वाक्य लिखें :**

**[1 x 5 = 5]**

1. ....

2. ....

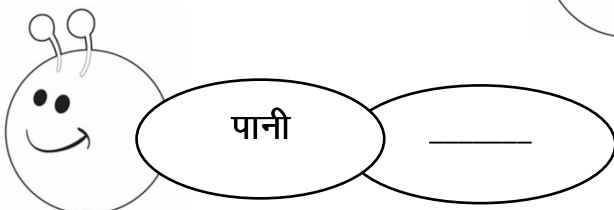
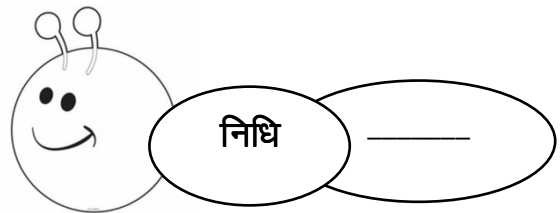

3. ....

4. ....

5. ....

**XIII. तुक मिलाकर आगे वाले शब्द लिखिए:-**

**[1x3=3]**





# DELHI PUBLIC SCHOOL

SAIL Township, Ranchi

FIRST SEMESTER EXAMINATION (SESSION-2022-23)

SUBJECT: Maths

DATE :- 10.09.2022

CLASS: – I Sec:- \_\_\_\_\_

Time: 2 Hours

M.O. :- \_\_\_\_\_

Roll no.:- \_\_\_\_\_


F. M. :- 40

NAME:- \_\_\_\_\_

## I. Choose the correct option:-

[1x10=10]

Q1. Count the number of balloons and tick the correct number:-



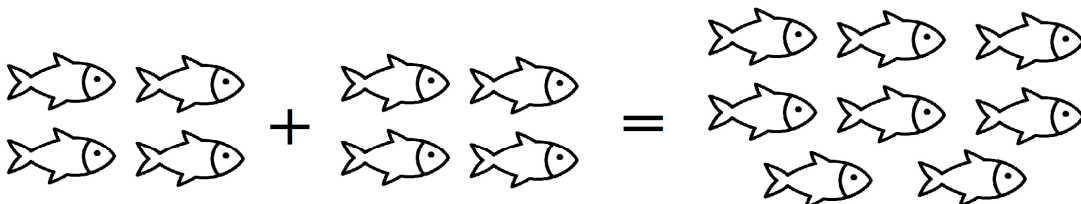
- a) 6       b) 5       c) 4       d) 7

Q2. Tick the odd one out:-



- a)       b)       c)       d)

Q3.



$$4 + \square = \square$$

- a) 6,9       b) 5,8       c) 4,8       d) 6,7

Q4. Hema had 12 stamps. She gets 26 more stamps. How many stamps does Hema have now?

- a) 48       b) 38       c) 28       d) 37

Q5. What number comes just after 69?

- a) 68       b) 70       c) 71       d) 67

Q6. What number is 10 less than 77?

- a) 67       b) 57       c) 87       d) 47

Q7. Seven less than 47 is \_\_\_\_\_ tens.

- a) 4       b) 7       c) 3       d) 40

Q8. Subtract:

$$15 - 8 = \boxed{?}$$

- a) 7       b) 6       c) 8       d) 9

Q9.  $74 = \boxed{\phantom{00}}$  tens +  $\boxed{\phantom{00}}$  ones

- a) 7, 4       b) 4, 7       c) 70, 40       d) 40, 70

Q10. There are no birds on a tree. 5 birds come and sit on the tree. How many birds are there on the tree now?

- a) 5       b) 0       c) 6       d) 50

**II. Fill in the blanks:-**

**[0.5x10=5]**

- 1) When we subtract zero from a number, the number remains the \_\_\_\_\_.
- 2) When we subtract a number from itself, we get \_\_\_\_\_.
- 3) \_\_\_\_\_ is between 67 and 69.
- 4)  $97 \boxed{\phantom{00}} 78$  ( $>$ ,  $<$  or  $=$ )
- 5) "Ascend" means \_\_\_\_\_.
- 6) 3 more than 40 is \_\_\_\_\_.
- 7)  $5 \times 9 =$  \_\_\_\_\_.
- 8) The Roman numeral for 9 is \_\_\_\_\_.
- 9)  $60 \boxed{\phantom{00}} 61 - 1$  ( $>$ ,  $<$  or  $=$ )
- 10) 2 less than 31 is \_\_\_\_\_.

**III. Fill in :-**

**[0.5x4=2]**

- 1)  $4 \times 8 =$  \_\_\_\_\_
- 2)  $3 \times 9 =$  \_\_\_\_\_
- 3)  $5 \times 7 =$  \_\_\_\_\_
- 4)  $4 \times 9 =$  \_\_\_\_\_

**IV. Fill in the missing numbers:-**

**[0.5x4=2]**

- 1) 42, \_\_\_\_\_, 46, \_\_\_\_\_
- 2) 85, \_\_\_\_\_, 95, \_\_\_\_\_

**V. Write in the expanded form (long form):-**

[0.5x4=2]

1)  $49 = \underline{\hspace{2cm}}$  tens +  $\underline{\hspace{2cm}}$  ones

=  $\underline{\hspace{2cm}}$  +  $\underline{\hspace{2cm}}$

**VI. Write the number names:-**

[1x3=3]

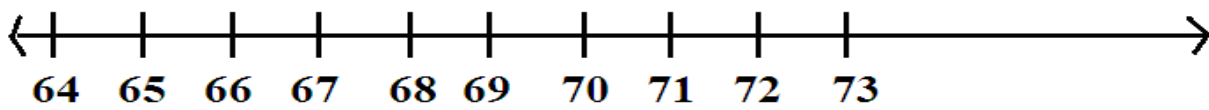
1) 298 - \_\_\_\_\_

2) 147 - \_\_\_\_\_

3) 189 - \_\_\_\_\_

**VII. Using the number line, write the correct answer:-**

[0.5x6=3]



1) Which number is before 68 ?

2) 70 is between which **two** numbers ?  and

3) A number which is greater than 71 and less than 73 is .

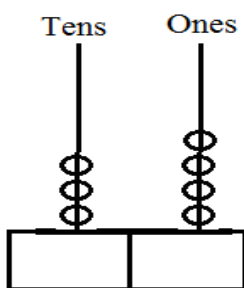
4) The number that comes before 66 is the same as the number that comes after .

5)  $72 - \square = 72$

**VIII.**

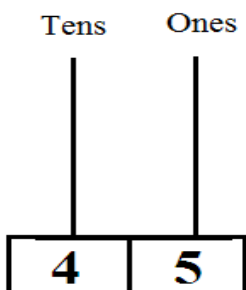
1. Write the numerals in the placeholders:-

[0.5x2=1]



2. Make the beads in each spike of abacus:-

[0.5x2=1]



**IX. Addition:-**

[0.5x6=3]

$$\begin{array}{r} \square \\ 59 \\ + 39 \\ \hline \square \end{array}$$

$$\begin{array}{r} \square \\ 76 \\ + 14 \\ \hline \square \end{array}$$

$$\begin{array}{r} \square \\ 49 \\ + 48 \\ \hline \square \end{array}$$

**X. Subtract:-**

[1x2=2]

1)  $16 - 8 = \square$

2)  $13 - 7 = \square$

**XI. Word problem:-**

[2x3=6]

1. Rohan is 9 years old and Sahil is 4 years old. Who is older and by how many years?

2. What number is 2 more than 4?

3. Kamla is 10 years old. Her brother Rishi is 6 years younger than her. How old is Rishi?





# DELHI PUBLIC SCHOOL

SAIL Township, Ranchi

**FIRST SEMESTER (SESSION-2022-23)**

**SUBJECT:** General Knowledge

**DATE :-** 29.08.2022

**CLASS: – I Sec:-** \_\_\_\_\_

**Time: 1 Hour**

**M.O. :-** \_\_\_\_\_

**Roll no.:-** \_\_\_\_\_

**F. M. :- 25**

**NAME:-** \_\_\_\_\_

**I. Tick the correct option:**

[ 1 x 6 = 6 ]

1) Which of the following is a natural thing?

a) hat

b) pig

c) house

d) table

2) The sound made by a horse is \_\_\_\_\_.

a) moo

b) chirp

c) neigh

d) hiss

3) A \_\_\_\_\_ grows crops for us.

a) plumber

b) teacher

c) doctor

d) farmer

4) I brush my \_\_\_\_\_ everyday.

a) teeth

b) nose

c) eyes

d) ears

5) Who is the current President of India?

a) Mr Narendra Modi

b) Mrs Draupadi Murmu

c) Mr Hemant Soren

d) Mr Ramesh Bias

6) How many states are there in India?

a) 26

b) 27

c) 28

d) 30

**II. Match with the correct pair:**

[ 0.5 x 4 = 2 ]

1) duck

a) bleat

2) happy

b) bee

3) honey

c) sad

4) sheep

d) pond

**III. Fill in the blanks using the help box:**

[ 1 x 5 = 5 ]

*man-made, pencil, Helicopter, tailor, Neck*

1) A \_\_\_\_\_ stitches clothes for us.

2) We write with a \_\_\_\_\_.

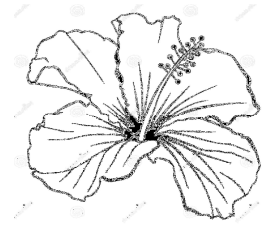


3) A house is a \_\_\_\_\_ thing.

4) \_\_\_\_\_ joins the head to your body.

5) \_\_\_\_\_ is a means of air transport.

**IV. Identify the picture and write it's name:**

[ 1 x 3 = 3]



**V. Answer the following questions :**

[ 1.5 + 1 + 1.5 = 4]

a) Why is auto-rickshaw called a three-wheeler ? (1.5)

---

---

---

b) Why should you wash your hands ? (1)

---

---

---

c) Whose call/sound is the loudest on Earth ? (1.5)

---

---

---

**VI. Fill in the missing letters:**

[ 0.5 x 6 = 3]

1) P L \_ \_ M B \_ \_ R

2) B \_ \_ C Y \_ \_ L E

3) H \_ \_ S P I T \_ \_ L

**VII. Write 'T' for True or 'F' for False:**

[ 0.5 x 4 = 2]

a) A barber uses needle to cut your hair.

b) A teacher teaches us at school.

c) A dog moos.

d) An apple is a natural thing.



# DELHI PUBLIC SCHOOL

SAIL Township, Ranchi

FIRST SEMESTER EXAMINATION (SESSION-2022-23)

**SUBJECT:** Computer

**DATE :-** 02.09.2022

**CLASS: – I Sec:-** \_\_\_\_\_

**Time: 1 Hour**

**M.O. :-** \_\_\_\_\_

**Roll no.:-** \_\_\_\_\_

**F. M. :-** 20

**NAME:-** \_\_\_\_\_

**Q1) Choose the correct option:-**

**[0.5 X 4=2]**

a) I am known as brain of computer.

i) Monitor       ii) CPU       iii) Printer

b) I display results and look like a TV.

i) Mouse       ii) Monitor       iii) CPU

c) Don't play with \_\_\_\_\_ of a computer.

i) wires       ii) toys       iii) pens

d) A computer is an \_\_\_\_\_ device.

i) ordinary       ii) natural       iii) electronic

**Q2) Fill in the blanks:-**

**[1 X 4=4]**

[Keyboard      information      online      eatables]

a) Never keep \_\_\_\_\_ near the computer.

b) Computer can help you to attend \_\_\_\_\_ classes.

c) Computer can store \_\_\_\_\_ .

d) \_\_\_\_\_ helps to type letters.

**Q3) Write (T) for True or (F) for False:-**

**[0.5 X 4=2]**

a) A computer cannot send e-mails.

b) Put dust cover over the computer after finishing your work.

c) A computer can be used to draw pictures.

d) Computer works at a very slow speed.

**Q4) Unscramble the words:-**

**[1 X 4=4]**

- a) TNPRIRE - \_\_\_\_\_
- b) NERNSCA - \_\_\_\_\_
- c) TOPLAP - \_\_\_\_\_
- d) KSEPAER - \_\_\_\_\_

**Q5) Guess who am I?**

**[1 X 4=4]**

a) I am smaller than laptop but bigger than mobile phone.

\_\_\_\_\_

b) I can supply uninterrupted power.

\_\_\_\_\_

c) I have many buttons for letters, numbers and other signs.

\_\_\_\_\_

d) I can take images from paper and keep in computer.

\_\_\_\_\_

**Q6) Answer the following questions:-**

**[1 X 3=3]**

a) What is the full form of CPU?

\_\_\_\_\_

b) Which application is used to draw pictures in computer?

\_\_\_\_\_

c) Write any one use of computer.

\_\_\_\_\_

**Q7) Draw Monitor and colour it (use pencil colour).**

**[1]**